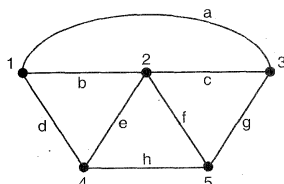


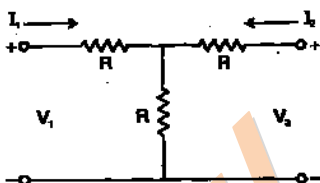
## ELECTRONICS &amp; COMMUNICATION ENGINEERING

## ONE MARKS QUESTIONS

1. Identify which of the following is NOT a tree of the graph shown in the figure

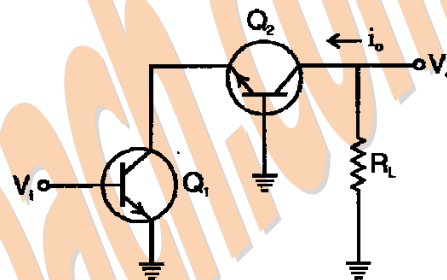


- a. begh  
b. defg  
c. adhg  
d. aegh
2. A 2-port network is shown in the figure. The parameter  $h_{21}$  for this network can be given be



- a.  $-1/2$   
b.  $+1/2$   
c.  $-3/2$   
d.  $+3/2$
3. The early effect in a bipolar junction transistor is caused by
- a. fast turn-on  
b. fast turn-off  
c. large collector-base reverse bias  
d. large emitter-base forward bias
4. The first dominant pole encountered in the frequency response of a compensated op-amp is
- a. 5 Hz  
b. 10kHz  
c. 1 MHz  
d. 100 MHz
5. Negative feedback in an amplifier
- a. reduces gain  
b. increases frequency and phase distortions

- c. reduces bandwidth  
d. increases noise
6. In the cascade amplifier shown in the figure, if the common-emitter stage ( $Q_1$ ) has a trans-conductance  $g_{m1}$ , and the common base stage ( $Q_2$ ) has a trans-conductance  $g_{m2}$ , then the overall trans-conductance  $g (= i_o/v_i)$  of the cascade amplifier is



- a.  $g_{m1}$   
b.  $g_{m2}$   
c.  $g_{m1}/2$   
d.  $g_{m2}/2$
7. Crossover distortion behaviour is characteristic of
- a. Class A output stage  
b. Class B output stage  
c. Class AB output stage  
d. Common-base output stage
8. The logical expression  $y = A + \bar{A}B$  is equivalent to
- a.  $y = AB$   
b.  $y = \bar{A}B$   
c.  $y = \bar{A} + B$   
d.  $y = A + B$
9. A Darlington emitter-follower circuit is sometimes used in the output stage of a TTL gate in order to
- a. increase its  $I_{OL}$   
b. reduce its  $I_{OH}$   
c. increase its speed of operation  
d. reduce power dissipation
10. Commercially available ECL gears use two ground lines and one negative supply in order to

- a. reduce power dissipation  
 b. increase fan-out  
 c. reduce loading effect  
 d. eliminate the effect of power line glitches or the biasing circuit
11. The resolution of a 4-bit counting ADC is 0.5 volts. For an analog input of 6.6 volts, the digital output of the ADC will be  
 a. 1011  
 b. 1101  
 c. 1100  
 d. 1110
12. The z-transform  $F(z)$  of the function  $f(nT) = a^{nT}$  is  
 a.  $\frac{z}{z - a^T}$   
 b.  $\frac{z}{z + a^T}$   
 c.  $\frac{z}{z - a^{-T}}$   
 d.  $\frac{z}{z + a^{-T}}$
13. If  $[f(t)] = F(s)$ , then  $[f(t-T)]$  is equal to  
 a.  $e^{sT} F(s)$   
 b.  $e^{-sT} F(s)$   
 c.  $\frac{F(s)}{1 + e^{sT}}$   
 d.  $\frac{F(s)}{1 - e^{sT}}$
14. A signal  $x(t)$  has a Fourier transform  $X(\omega)$ . If  $x(t)$  is a real and odd function of  $t$ , then  $X(\omega)$  is  
 a. a real and even function of  $\omega$   
 b. a imaginary and odd function of  $\omega$   
 c. an imaginary and even function of  $\omega$   
 d. a real and odd function of  $\omega$
15. For a second-order system with the closed-loop transfer function  

$$T(s) = \frac{9}{s^2 + 4s + 9}$$
 the settling time for 2-percent band, in seconds, is  
 a. 1.5  
 b. 2.0  
 c. 3.0  
 d. 4.0
16. The gain margin (in dB) of a system having the loop transfer function  

$$G(s)H(s) = \frac{\sqrt{2}}{s(s+1)}$$
 is  
 a. 0  
 b. 3  
 c. 6  
 d.  $\infty$
17. The system mode described by the state equations  

$$x \begin{bmatrix} 0 & 1 \\ 2 & -3 \end{bmatrix} x + \begin{bmatrix} 0 \\ 1 \end{bmatrix} u \quad Y = [1 \quad 1] x$$
 is  
 a. controllable and observable  
 b. controllable, but not observable  
 c. observable, but not controllable  
 d. neither controllable nor observable
18. The phase margin (in degrees) of a system having the loop transfer function  

$$G(s)H(s) = \frac{2\sqrt{3}}{s(s+1)}$$
 is  
 a.  $45^\circ$   
 b.  $-30^\circ$   
 c.  $60^\circ$   
 d.  $30^\circ$
19. The input to a channel is a band pass signal. It is obtained by linearly modulating a sinusoidal carrier with a single-tone signal. The output of the channel due to this input is given by  

$$y(t) = (1/100)\cos(100t - 10^{-6})\cos(10^6t - 1.56)$$
 The group delay ( $t_g$ ) and the phase delay ( $t_p$ ) in seconds, of the channel are  
 a.  $t_g = 10^{-6}, t_p = 1.56$   
 b.  $t_g = 1.56, t_p = 10^{-6}$   
 c.  $t_g = 10^{-8}, t_p = 1.56 \times 10^{-6}$   
 d.  $t_g = 10^8, t_p = 1.56$
20. A modulated signal is given by,  

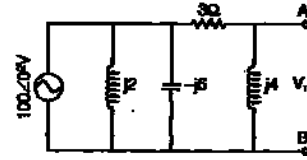
$$s(t) = m_1(t)\cos(2\pi f_c t) + m_2(t)\sin(2\pi f_c t)$$
 where the baseband signal  $m_1(t)$  and  $m_2(t)$  have bandwidths of 10 kHz and 15kHz, respectively. The bandwidth of the modulated signal, in kHz, is  
 a. 10

- b. 15  
c. 25  
d. 30
21. A modulated signal is given by  
 $s(t) = e^{-at} \cos[(\omega_c + \Delta\omega)t]u(t)$  where  $a$ ,  $\omega_c$  and  $\Delta\omega$  are positive constants, and  $\omega_c \gg \Delta\omega$ . The complex envelope of  $s(t)$  is given by  
 a.  $\exp(-at)\exp[j(\omega_c + \Delta\omega)t]u(t)$   
 b.  $\exp(-at)\exp(j\Delta\omega t)u(t)$   
 c.  $\exp(j\Delta\omega t)u(t)$   
 d.  $\exp[(j\omega_c + \Delta\omega)t]$
22. An electric field on a plane is described by its potential  $V = 20(r^{-1} + r^{-2})$  where  $r$  is the distance from the source. The field is due to  
 a. a monopole  
 b. a dipole  
 c. both a monopole and a dipole  
 d. a quadrupole
23. Assuming perfect conductors of a transmission line, pure TEM propagation is NOT possible in  
 a. coaxial cable  
 b. air-filled cylindrical waveguide  
 c. parallel twin-wire line in air  
 d. semi-infinite parallel plate wave guide
24. Indicate which one of the following will NOT exist in a rectangular resonant cavity.  
 a.  $TE_{110}$   
 b.  $TE_{011}$   
 c.  $TM_{110}$   
 d.  $TM_{111}$
25. Identify which one of the following will NOT satisfy the wave equation.  
 a.  $50e^{j(\omega t - 3z)}$   
 b.  $\sin[\omega(10z + 5t)]$   
 c.  $\cos(y^2 + 5t)$   
 d.  $\sin(x) \cos(t)$

### TWO MARKS QUESTIONS

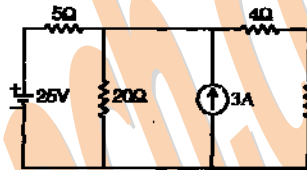
26. The Thevenin equivalent voltage  $V_{TH}$  appearing between the terminals A and B

of the network shown in the figure is given by



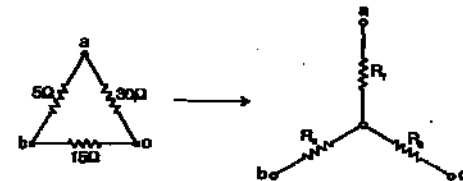
- a.  $j16(3-j4)$   
 b.  $j16(3+j4)$   
 c.  $16(3+j4)$   
 d.  $16(3-j4)$

27. The value of  $R$  (in ohms) required for maximum power transfer in the network shown in the figure is



- a. 2  
 b. 4  
 c. 8  
 d. 16

28. A Delta-connected network with its Wye-equivalent is shown in the figure. The resistances  $R_1$ ,  $R_2$  and  $R_3$  (in ohms) are respectively

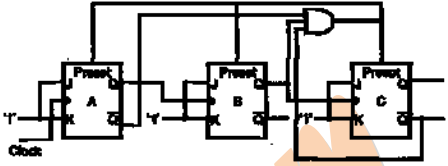


- a. 1.5, 3 and 9  
 b. 3, 9 and 1.5  
 c. 9, 3 and 1.5  
 d. 3, 1.5 and 9

29. An n-channel  $I_{DSS} = 2$  mA and  $V_p = -4$  V. Its transconductance  $g_m$  (in mA/V) for an applied gate to source voltage  $V_{GS}$  of  $-2$  V is

- a. 0.25  
 b. 0.5  
 c. 0.75  
 d. 1.0

30. An npn transistor (with  $C = 0.3$  pF) has a unity - gain cutoff frequency  $f_T$  of 400 MHz at a dc bias current  $I_C = 1$  mA. The value of its  $C$  (in pF) is approximately ( $V_T = 26$  mV)

- a. 15  
b. 30  
c. 50  
d. 96
31. An amplifier has an open-loop gain of 100, an input impedance of  $1\text{k}\Omega$ , and an output impedance of  $100\ \Omega$ . A feedback network with a feedback factor of 0.99 is connected to the amplifier in a voltage series feedback mode. The new input and output impedances, respectively, are
- a.  $10\ \Omega$  and  $1\ \Omega$   
b.  $10\ \Omega$  and  $10\ \Omega$   
c.  $100\ \text{k}\Omega$  and  $1\ \Omega$   
d.  $100\ \text{k}\Omega$  and  $1\ \text{k}\Omega$
32. A dc power supply has a no-load voltage of 30V, and a full-load voltage of 25V at a full-load current of 1A. Its output resistance and load regulation, respectively, are
- a.  $5\ \Omega$  and 20%  
b.  $25\ \Omega$  and 20%  
c.  $5\ \Omega$  and 16.7%  
d.  $25\ \Omega$  and 16.7%
33. An amplifier is assumed to have a single-pole high-frequency transfer function. The rise time of its output response to a step function input is 35 nsec. The upper  $-3$  dB frequency (in MHz) for the amplifier to a sinusoidal input is approximately at
- a. 4.55  
b. 10  
c. 20  
d. 28.6
34. The minimized form of the logical expression  $(\overline{A}\overline{B}\overline{C} + \overline{A}\overline{B}C + \overline{A}B\overline{C} + \overline{A}BC)$  is
- a.  $\overline{A}\overline{C} + \overline{B}\overline{C} + \overline{A}\overline{B}$   
b.  $\overline{A}\overline{C} + \overline{B}C + \overline{A}\overline{B}$   
c.  $\overline{A}C + \overline{B}C + \overline{A}\overline{B}$   
d.  $\overline{A}\overline{C} + \overline{B}C + \overline{A}\overline{B}$
35. For a binary half-subtractor having two inputs A and B, the correct set of logical expressions for the outputs D (=A minus B) and X (=borrow) are
- a.  $D = AB + \overline{A}\overline{B}, X = \overline{A}\overline{B}$   
b.  $D = \overline{A}\overline{B} + \overline{A}B + \overline{A}\overline{B}, X = \overline{A}\overline{B}$   
c.  $D = \overline{A}\overline{B} + \overline{A}B, X = \overline{A}\overline{B}$   
d.  $D = AB + \overline{A}\overline{B}, X = \overline{A}\overline{B}$
36. The ripple counter shown in the figure works as a
- 
- a. mod-3 up counter  
b. mod-5 up counter  
c. mod-3 down counter  
d. mod-5 down counter
37. If  $CS = \overline{A}_{15}A_{14}A_{13}$  is used as the chip select logic of a 4K RAM in an 8085 system, then its memory range will be
- a. 3000H-3FFFH  
b. 7000 H -7 FFF H  
c. 5000H-5FFFHand6000H-6 FFFH  
d. 6000 H-6 FFF H and 7000 H-7 FFFH
38. The Fourier series representation of an impulse train denoted by  $s(t) = \sum_{n=-\infty}^{\infty} \delta(t - nT_0)$  is given by
- a.  $\frac{1}{T_0} \sum_{n=-\infty}^{\infty} \exp\left(-\frac{2j\pi nt}{T_0}\right)$   
b.  $\frac{1}{T_0} \sum_{n=-\infty}^{\infty} \exp\left(-\frac{j\pi nt}{T_0}\right)$   
c.  $\frac{1}{T_0} \sum_{n=-\infty}^{\infty} \exp\left(\frac{j\pi nt}{T_0}\right)$   
d.  $\frac{1}{T_0} \sum_{n=-\infty}^{\infty} \exp\left(\frac{j2\pi nt}{T_0}\right)$
39. The z-transform of a signal is given by  $C(z) = \frac{1z^{-1}(1-z^{-4})}{4(1-z^{-1})^2}$  (a) in. Its final value is
- a. 1/4  
b. zero  
c. 1.0  
d. infinity
40. If the closed-loop transfer function T(s) of a unity negative feedback system is given by

$$T(s) = \frac{a_{n+1}s + a_n}{s^n + a_1s^{n-1} + \dots + a_{n-1}s + a_n}$$

then the steady state error for a unit ramp input is

- $\frac{a_n}{a_n - 1}$
  - $\frac{a_n}{a_{n-2}}$
  - $\frac{a_{n-2}}{a_{n-2}}$
  - zero
41. Consider the points  $s_1 = -3 + j4$  and  $s_2 = -3 - j2$  in the s-plane. Then, for a system with the open-loop transfer function
- $$G(s)H(s) = \frac{K}{(s+1)^4}$$
- $s_1$  is on the root locus, but not  $s_2$
  - $s_2$  is on the root locus, but not  $s_1$
  - both  $s_1$  and  $s_2$  are on the root locus
  - neither  $s_1$  nor  $s_2$  is on the root locus
42. For the system described by the state equation
- $$\dot{x} = \begin{bmatrix} 0 & 1 & 0 \\ 0 & 0 & 1 \\ 0.5 & 1 & 2 \end{bmatrix} x + \begin{bmatrix} 0 \\ 0 \\ 1 \end{bmatrix} u$$
- If the control signal  $u$  is given by  $u = [-0.5 \quad -3 \quad -5] x + v$ , then the eigenvalues of the closed-loop system will be
- 0, -1, -2
  - 0, -1, -3
  - 1, -1, -2
  - 0, -1, -1
43. The Nyquist sampling frequency (in Hz) of a signal given by  $6 \times 10^4 \sin^3(400t) * 10^6 * \sin^3(100t)$  is
- 200
  - 300
  - 1500
  - 1000
44. The peak-to-peak input to an 8-bit PCM coder is 2 volts. The signal power-to-quantization noise power ratio (in dB) for an input of  $0.5 \cos(\omega_m t)$  is
- 47.8
  - 43.8
  - 95.6
  - 99.6
45. The input to a matched filter is given by
- $$s(t) = \begin{cases} 10 \sin(2\pi \times 10^6 t) & 0 < t < 10^{-4} \text{ sec} \\ 0 & \text{Otherwise} \end{cases}$$
- The peak amplitude of the filter output is
- 10 volts
  - 5 volts
  - 10 milli volts
  - 5 milli volts
46. Four independent messages have bandwidths of 100 Hz, 100 Hz, 200 Hz, and 400 Hz, respectively. Each is sampled at the Nyquist rate, and the samples are time division multiplexed (TDM) and transmitted. The transmitted sample rate (in Hz) is
- 1600
  - 800
  - 400
  - 200
47. A transmitting antenna radiates 251 W isotropically. A receiving antenna, located 100 m away from the transmitting antenna, has an effective aperture of  $500 \text{ cm}^2$ . The total power received by the antenna is
- $10 \mu\text{W}$
  - $1 \mu\text{W}$
  - $20 \mu\text{W}$
  - $100 \mu\text{W}$
48. In a twin-wire transmission line in air, the adjacent voltage maxima are at 12.5 cm and 27.5 cm. The operating frequency is
- 300 MHz
  - 1 GHz
  - 2 GHz
  - 6.28 GHz
49. In air, a lossless transmission line of length 50 cm with  $L = 10 \mu\text{H/m}$ ,  $C = 40 \text{ pF/m}$  is operated at 25 MHz. Its electrical path length is
- 0.5 meters
  - $\lambda$  meters
  - $\pi/2$  radians
  - 180 degrees
50. A plane wave propagating through a medium [ $\epsilon_r = 8$ ,  $\mu_r = 2$ , and  $\sigma = 0$ ] has its electric field given by

$\vec{E} = 0.5e^{-(z/3)} \sin(10^8 t - \beta z) \text{ V/m}$ . The wave impedance, in ohms is

- a. 377
- b.  $198.5 \angle 180^\circ$
- c.  $182.9 \angle 14^\circ$
- d. 188.3

www.thegatecoach.com